
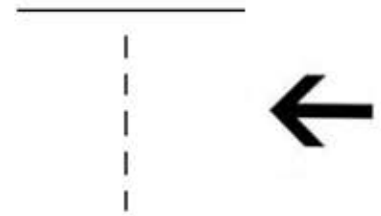

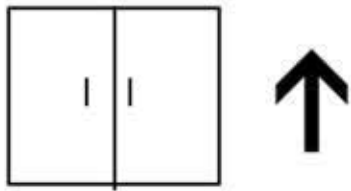


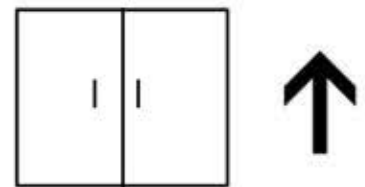
# Mall Hunt

# GC30V6T



How many corners are there on the long silver pole going horizontally across the fountain?

**REMEMBER THE #!**



Now Project a waypoint from where you are!

Bearing/Degrees: 145 PLUS how many corners were on the silver pole on the fountain?

Feet: If a store has a 25% off sale, what % of the cost are you paying?